
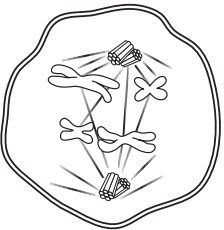
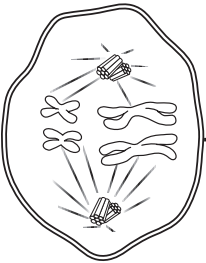
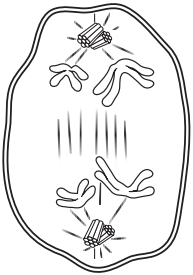
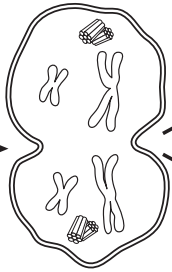
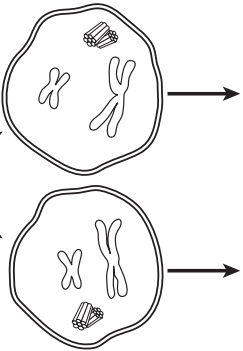


Name: \_\_\_\_\_

Date: \_\_\_\_\_

### Stages of Meiosis

Label the stages of meiosis I and meiosis II and briefly explain what is happening at each stage.



(a) Meiosis I

\_\_\_\_\_

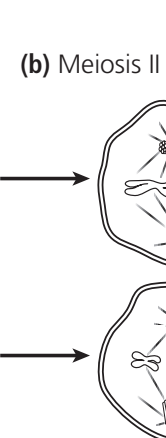
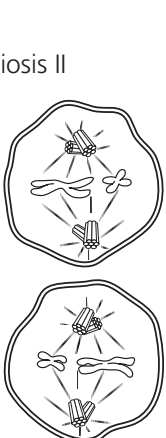
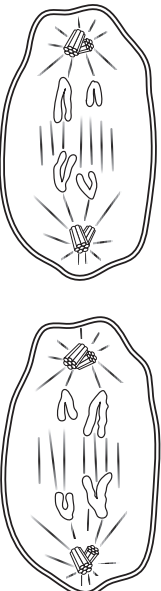
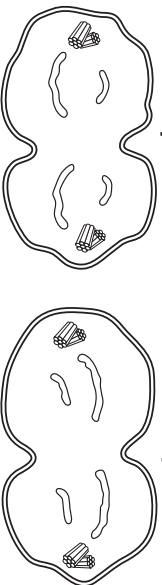
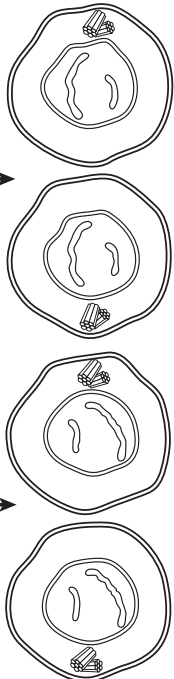
\_\_\_\_\_

\_\_\_\_\_

\_\_\_\_\_

\_\_\_\_\_

\_\_\_\_\_



(b) Meiosis II

\_\_\_\_\_

\_\_\_\_\_

\_\_\_\_\_

\_\_\_\_\_

\_\_\_\_\_

\_\_\_\_\_